


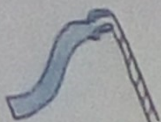





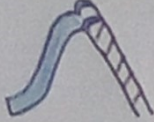












♥ Dilych G-8  
Thank You Mrs S



# Bobby's Montgomery



EASY	1.  + 2 = <input type="text"/>	HMWDD
	2.  -  = <input type="text"/>	
	3.  +  +  = <input type="text"/>	
MEDIUM	4.  ×  = <input type="text"/>	GANOLIG
	5. <input type="text"/> ×  = 30	
	6.  × 7 -  = <input type="text"/>	
HARD	7.  ÷  ×  = <input type="text"/>	ANODD
	8.  <sup>2</sup> × 10 +  -  = <input type="text"/>	
	9. <input type="text"/> ÷ 5 ×  +  = 20	

Bobby needs help with his Maths homework, can you help him? Use the pictures below to solve the maths equations above.

Mae Bobby angen help gyda'i waith cartref mathemateg, allwch chi ei helpu? Defnyddiwch y lluniau isod i datrys yr hafaliadau mathemateg uchod.

SCHOOL <b>8</b> YSGOL 	CASTLE <b>4</b> CASTELL 	PARK <b>3</b> PARC 
--	--	--

